

each group got six hot dogs.

$$6 + 6 + 6 + 6 = 24$$

E4

Sam's dad bought 24 hotdogs for Sam and his 3 friends. How many hot dogs can they each have?

B14

4 groups of 6

I put 4 in each one

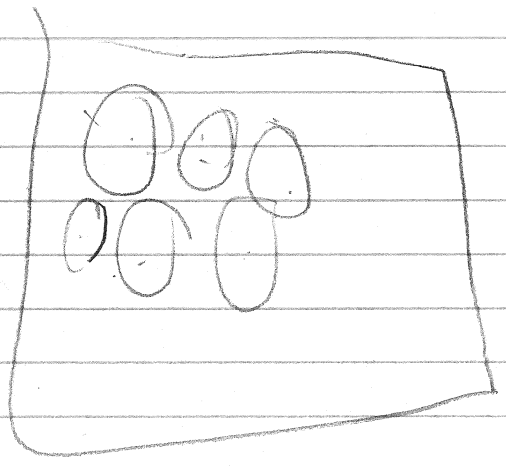
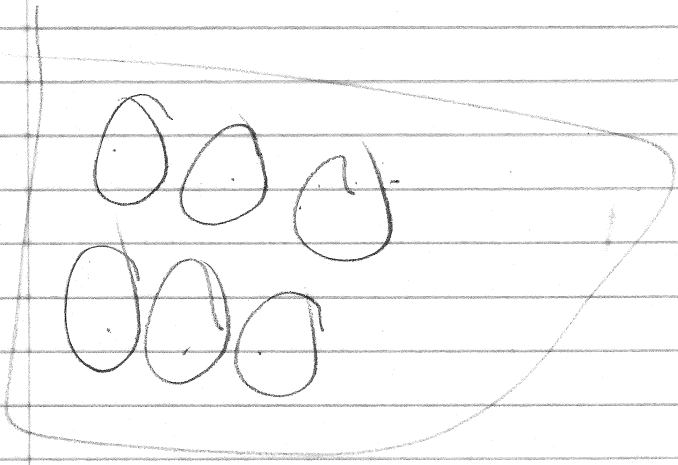
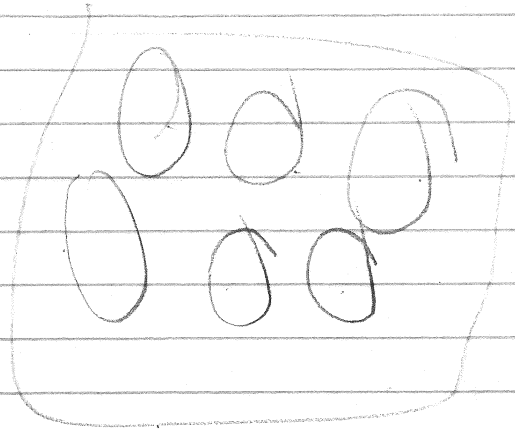

B14
Groups of 5

E10
David wants to give his 4
friends 5 books each. How
many books will he need?

D17

$$24 \times 3 =$$


each have?



24

E5

Debbie wants to give her 5 friends 4 balloons each. How many balloons must she buy?



I then
broch them a part and
I made them in to
5. And I got 20 as my
anser

B2

5 groups of 4



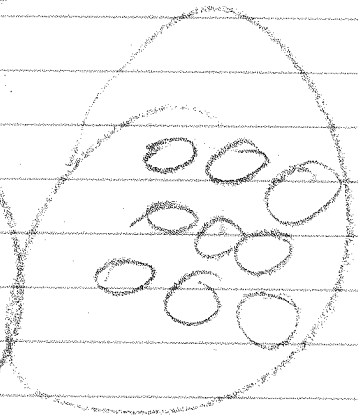
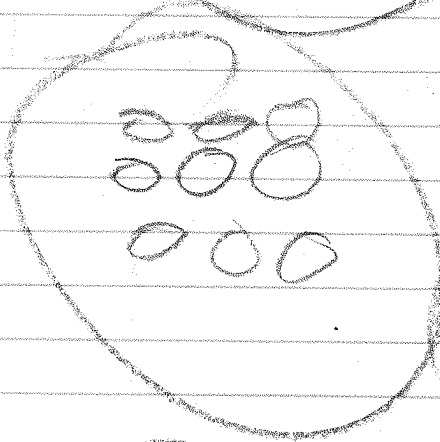
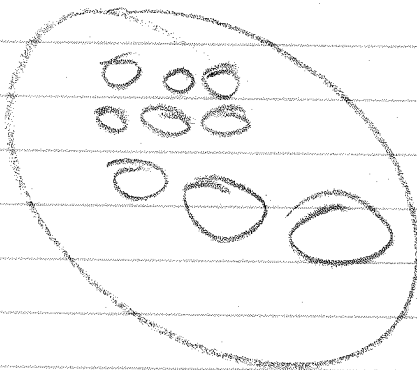

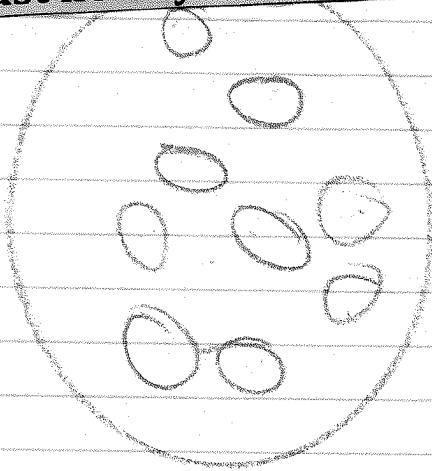
My answer is ~~72~~ 72


E6

Matt wants to give his 8 friends 9 baseball cards each. How many baseball cards must he buy?

B14

8 groups of 9








E6

Matt wants to give his 8 friends 9 baseball cards each. How many baseball cards must he buy?

B10

8 times as big as 9

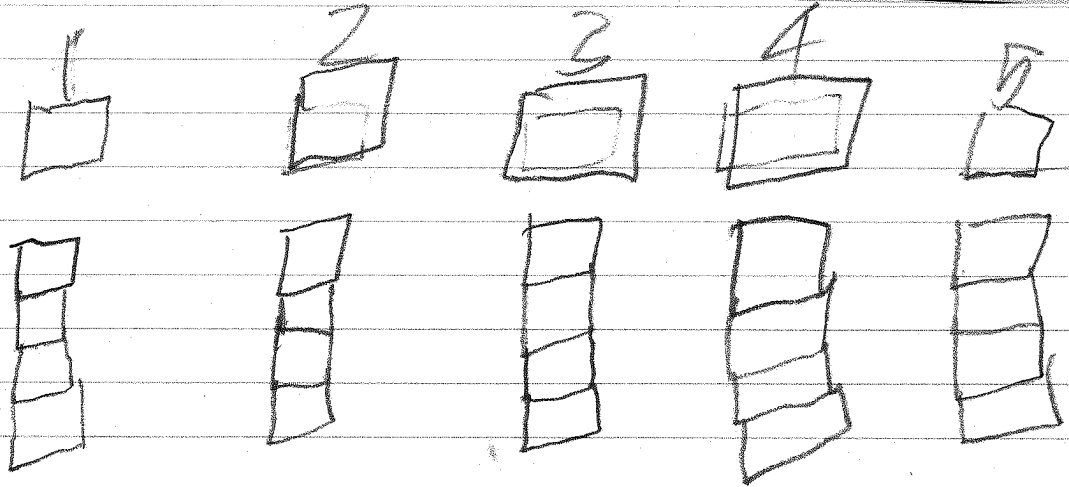


B14

8 groups of 9


5 groups of 4

E5
Debbie wants to give her 5 friends 4 balloons each. How many balloons must she buy? ~~10~~ 20



MY ANSWER
IS
20

HOW I GOT MY ANSWER WAS THAT I DID EVERY PROBLEM LIKE $5 \times 4 = 20$
 $16 + 4 = 20$ $28 - 8 = 20$ $20 \div 5 = 4$ AND
THAT'S



E11 | Sally baked 15 cookies she puts 3 cookies in each bag How many did she make? The answer is $3 \times 5 = 15$

$$12 \div 3 = 5$$

$$12 \div 5 = 3$$

$$3 \overline{) 12}$$

E11 Sally baked 15 cookies. She put them in bags of 3 cookies. How many bags of cookies did she make?

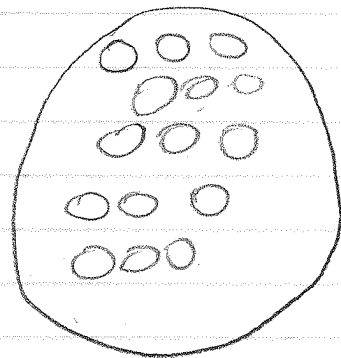
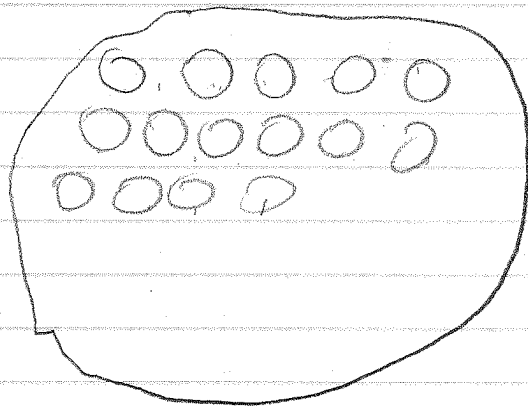
B5

? number of equal groups of 3 in 15

First step
Fifth

a stick 15 with one

First, I made 1 one stick of 15 fifth
teen. Also I put them in ~~three~~ three, Finally
I counted it. answer 15.



E11 Sally baked 15 cookies. She put them in bags of 3 cookies. How many bags of cookies did she make?

B5

? number of equal groups of 3 in 15

SWR 36

I count round 3 and I got 36

E9

**Daniel buys 3 dozen donuts.
How many donuts does he
buy?**

B4

3 groups of 12

B9

7 groups of 8

E2

Susie wants to give her 7 friends 8 pieces of candy each. How many pieces of candy will she need to buy?

E10

David wants to give his 4 friends 5 books each. How many books will he need?

B10

8 times as big as 9

B11

6 groups of is 24

E7

**Sarah buys 6 pieces of
bubble gum for 24 cents.
How much does each piece**

B9

7 groups of 8

E2

Susie wants to give her 7 friends 8 pieces of candy each. How many pieces of candy will she need to buy?

E5
16 #
Debbie wants to give her 5
friends 4 balloons each. How
many balloons must she
buy?

B2

5 groups of 4

20 balloons

B5

?

number of equal groups of 3 in 15

E11 Sally baked 15 cookies. She put them in bags of 3 cookies. How many bags of cookies did she make? 45

Susie wants to give her 7 friends 8 pieces of candy each. How many pieces of candy will she need to buy?

E10

David wants to give his 4 friends 5 books each. How many books will he need?

B14

4 × 5 = 20